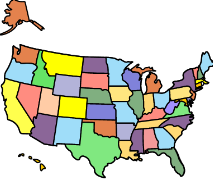

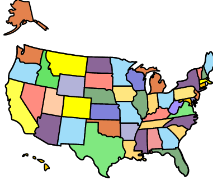








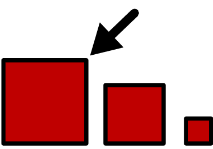












Matching

Name: _____

Choose the matching symbol in each row.

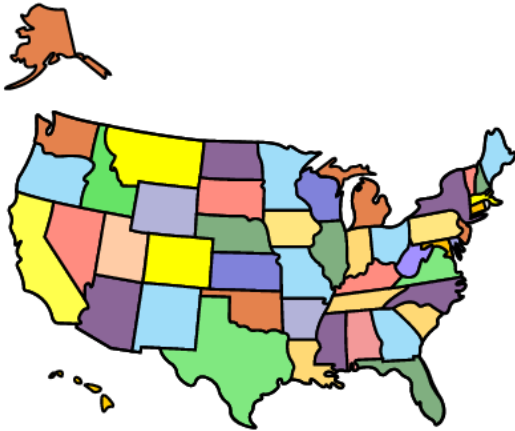
Vocabulary Words and Definitions

Name: _____

Read, practice and post these words on classroom word walls.

State Fairs

states



Territories with their own governments and borders within a bigger country

U.S.



Abbreviation for United States, a country in North America

fair



A fun event with rides, games, contests, food and more

foods




The things that people and animals eat


Word Definitions

Name: _____


Match each picture/word card to its definition.



Abbreviation for United States,
a country in North America



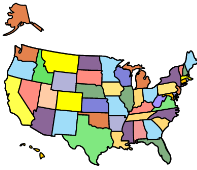



Territories with their own governments
and borders within a bigger country



The things that people and animals eat



A fun event with rides, games, contests,
food and more

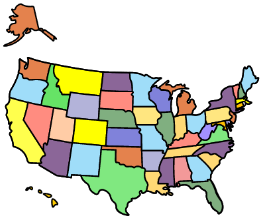
<p>states</p> 	<p>U.S.</p> 	<p>fair</p> 	<p>foods</p> 
---	---	--	--

Word Definitions


Name: _____

Write your own definitions for the words.


states



U.S.



fair




foods



Look, Read and Think

Name: _____

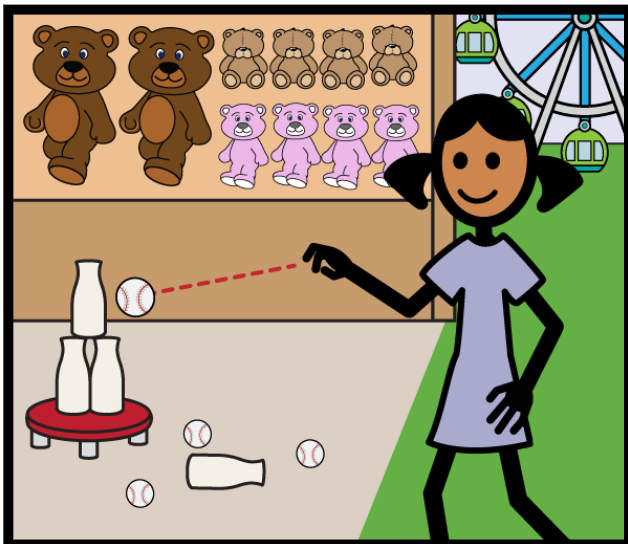
Place an "X" in the box next to the sentence that describes the picture.



A girl plays a game.

A girl is near a ride.


A girl sees a butter sculpture of a cow.



A girl is near a ride.

A girl sees a butter sculpture of a cow.

A girl plays a game.



A girl sees a butter sculpture of a cow.

A girl plays a game.


A girl is near a ride.

Counting Syllables

Name: _____

Say each word. Count the syllables. Place the number in each box.

farming



2

foods




musicians




contest



butter



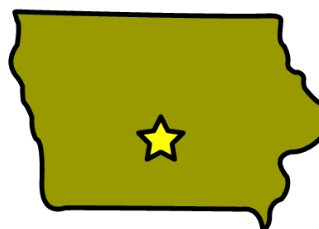
oldest



activities




Iowa



Beginning Sound

Name: _____


1. Say the name of each picture.
2. Circle the letter or letters in each row that make the same beginning sounds.




f c




f c



f c



f c



f c

Key: fair, carve, foods, farm, cowboy

Word Beginnings


Name: _____

1. Say the name of each picture.
2. Put the letter or letters of the beginning sound in each box.

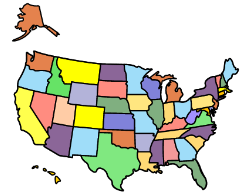




r

c

st



r



Key: real, cowboy, states, carve, start, rides, cow, statue, ride






Word Sort: Beginning Sound

Name: _____

1. Cut out the words/pictures. Glue the top section of the page to construction paper.
2. Sort the words that begin with /f/ and the words that begin with c (/k/).
Remember that the letter "c" sometimes sounds like /k/.

Begins with f

Begins with c



Key: carve, fair, cow, cowboy, foods, contest, fall, cow, farm

Find the Sound

Name: _____

Each picture has /v/ in it at the beginning, middle or end.

Say the word. Write the letter "v" in the box where the sound is located.

Example:




		v
--	--	---

Beginning

Middle

End




event

--	--	--

Beginning

Middle

End




vehicles

--	--	--

Beginning

Middle

End



carve

--	--	--

Beginning

Middle

End



activities

--	--	--

Beginning

Middle

End



visit

--	--	--

Beginning

Middle

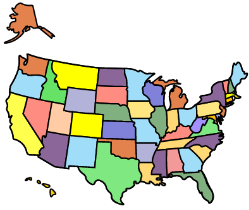
End

Beginning Letter

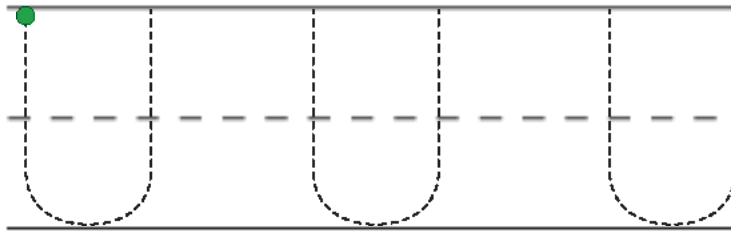

Name: _____

Start at the big dot. Trace each letter.

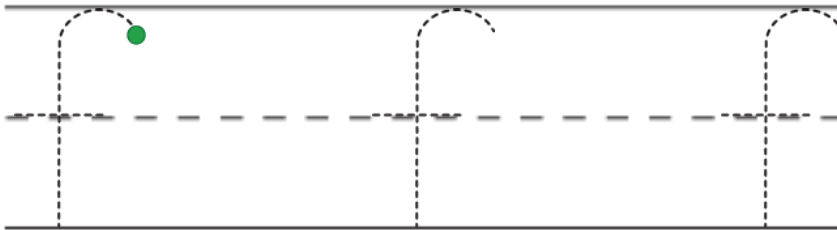

states



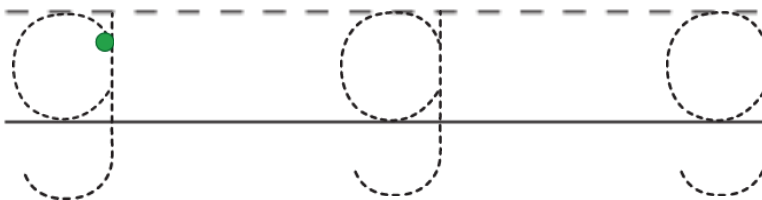

U.S.



fair



games

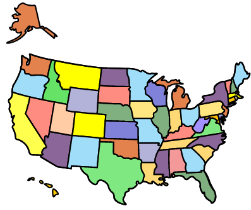


Write the Word

Name: _____


Trace the letters.

states




states

U.S.




U.S.

fair



fair

games



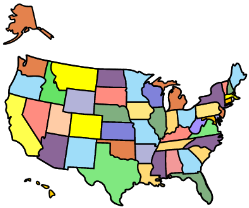
games

Beginning Letter

Name: _____


1. Start at the dots. Trace the letters.
2. Alphabetize the words. Record the order using the small boxes on the right using 1, 2, 3 and 4.

states




s s s

U.S.




U U U

fair



f f f

games



g g g

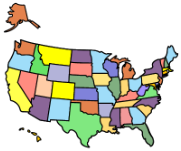
a b c d e f g h i j k l m n o p q r s t u v w x y z

Write the Word

Name: _____


1. Write the word.
2. On the line below the word, write a sentence using the word.

states




states

U.S.



U.S.

fair



fair

games



games

Cursive

Name: _____

1. Practice writing the beginning letter and word.
2. On the line below the word, write a sentence using the word.

states



s s s states

U.S.



u u u U.S.

fair



f f f fair

games


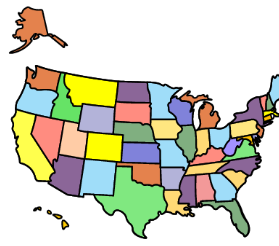








g g g games

Cut and Paste Activity

Name: _____


Match small pictures to large pictures.



Maze

Name: _____

Help the boy get to the games.



Word Sort


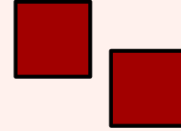
Name: _____

1. Cut out the words/pictures. Glue the top section of the page to construction paper.
2. Sort the singular and plural words.


Singular



Plural




corn dog




horses




rides



games



funnel cake



cow



foods



fair

Word Sort

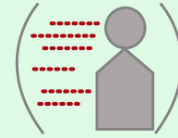
Name: _____

1. Cut out the words/pictures. Glue the top section of the page to construction paper.
2. Sort the nouns and verbs.

Nouns



Verbs




cowboy




fair




celebrate




carve




foods



chicken



teach



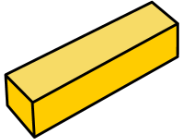
taste





Build a Sentence

Name: _____

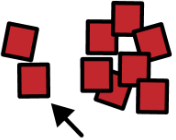
Choose the pictures below to complete the sentences from the paper.




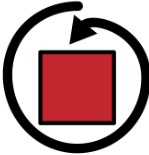

1.

One 1	butter 				
-----------------	---	--	--	--	--

sculpture 	a cow. 	looks 	like 
--	--	--	---

2.

Some 					
---	--	--	--	--	--

farming. 	kids 	teach 	about 	activities 
---	---	---	--	---

Sentence Completion

Name: _____

Choose a picture to complete the sentence.

1. States across the have state fairs.


2. Artists carve butter to make sculptures.

3. People can taste the .

4. Would you like to go to a state ?

5. Many U.S. have state fairs.

U.S.



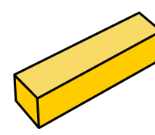
foods



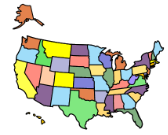
fair



butter



states



Sentence Completion

Name: _____

Choose a word to complete the sentence.

1. States across the have state fairs.

2. Artists carve butter to make sculptures.

3. People can taste the .

4. Would you like to go to a state ?


5. Many U.S. have state fairs.

fair	butter	foods	U.S.	states
------	--------	-------	------	--------

Write a Story

Name: _____

Use one, two or all of the following picture/word cards to write a sentence or a story.



Punctuation

Name: _____

A period (.) comes at the end of a statement or telling sentence. (I like to run.)

A question mark (?) comes at the end of a question or asking sentence. (Do you run?)

An exclamation point (!) comes at the end of a sentence to show strong feelings or emotion. (He can run fast!)

Choose the correct punctuation mark at the end of each sentence.

1. Most state fairs are in summer or fall

2. Artists carve butter to make butter sculptures

3. This butter sculpture is as big as a real cow

4. When did the New York State Fair start

5. What is the biggest state fair

6. What can people learn about at an auto show

Capitalization

Name: _____

The first word in a sentence begins with a capital letter. Proper nouns are also capitalized. Proper nouns name a specific noun such as a person's name, a city, an ocean, state or country.



Circle the capital letters.

1. States across the U.S. have state fairs.
 2. The Iowa State Fair is in Des Moines, Iowa.
 3. The 2021 Iowa State Fair is August 12-22.
-



Underline the letters that should be capitalized.

4. the new york state fair started in 1841.
5. the state fair of texas is in dallas, texas.
6. the statue is named big tex.

Capitalization and Punctuation

Name: _____

1. Circle all the capitalization and punctuation errors in each sentence.
2. Write the corrected sentence below each sentence.

1. The Iowa State fair has many activities for kids.

(1 error)

2. the new York State Fair is the oldest state fair.

(2 errors)

3. Some activities teach Kids about Farming

(3 errors)

4. The state fair of texas lasts 24 Days.

(4 errors)

5. would You like to go to a State Fair.







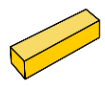


(5 errors)

Paragraph Completion

Name: _____

Choose the correct picture/word cards to complete the paragraph.


States across the have state fairs. State celebrate the they are in. State fairs have rides, , contests and fair . The New York State Fair is the state fair. The State Fair of Texas is the state fair. The Iowa State Fair is famous for sculptures. Artists carve butter to make butter .

games 	sculptures 	biggest 
fairs 	oldest 	states 
butter 	U.S. 	foods 

Dot-to-Dot

Name: _____

Count by 1s. What is this? _____



Patchwork Math

Name: _____

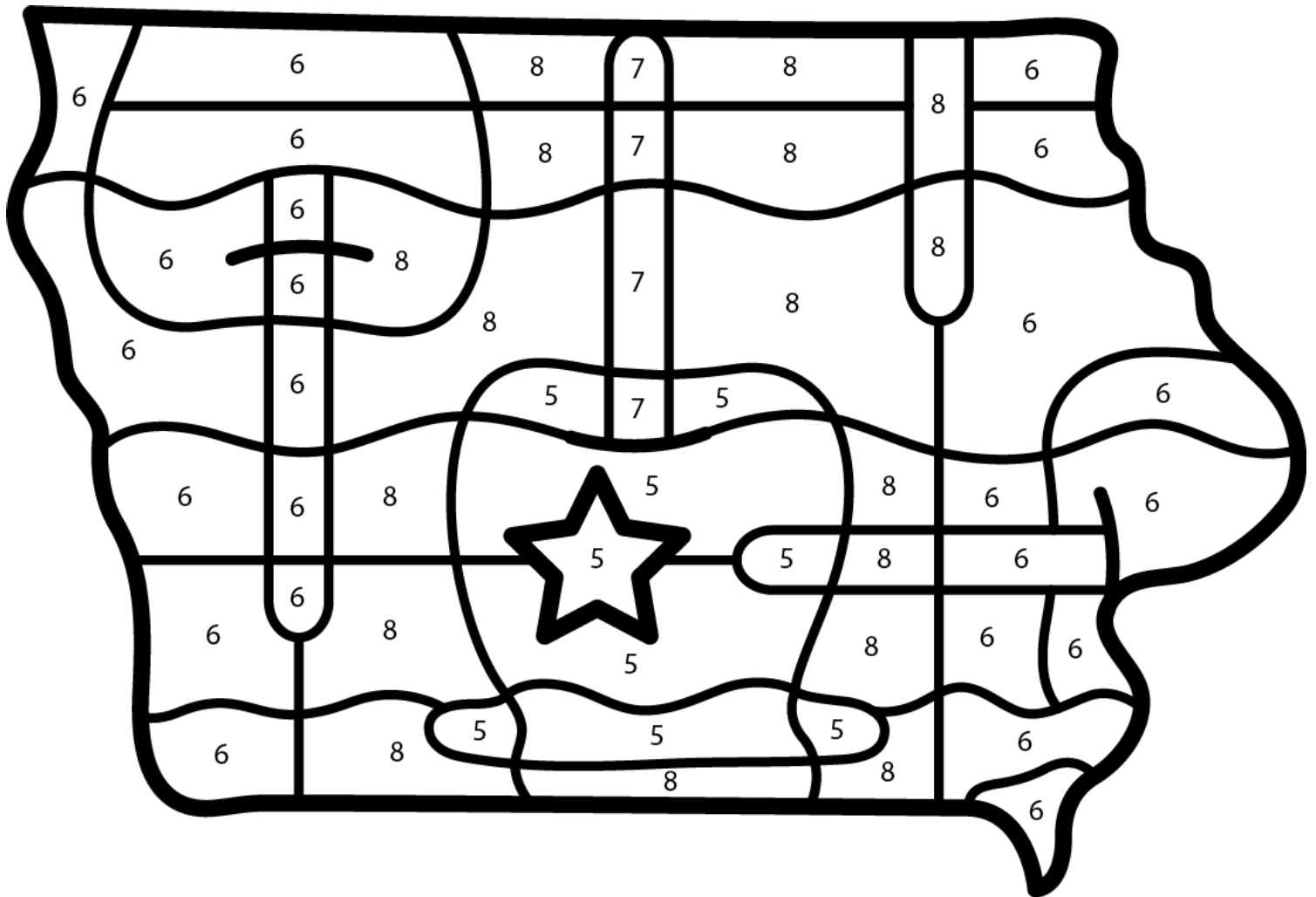
Color the picture of Iowa, using the colors beside the numbers below.

5 = red

6 = black

7 = brown

8 = yellow



What hidden picture did you find?

candy apple

cow

Which Is Greater?

Name: _____


1. Count the items in each row. Place the number in the box.
2. Place a checkmark in the small box next to the number that is greater.




Number	Which is greater?
<input type="text"/>	<input type="checkbox"/>



<input type="text"/>	<input type="checkbox"/>
----------------------	--------------------------



<input type="text"/>	<input type="checkbox"/>
----------------------	--------------------------




<input type="text"/>	<input type="checkbox"/>
----------------------	--------------------------



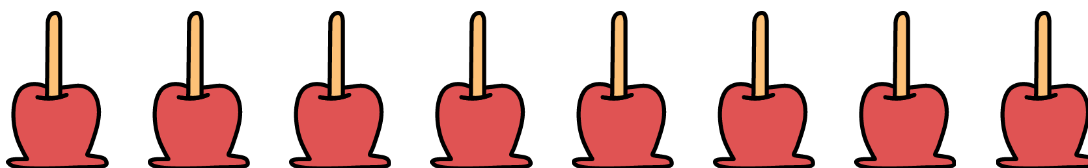
<input type="text"/>	<input type="checkbox"/>
----------------------	--------------------------



<input type="text"/>	<input type="checkbox"/>
----------------------	--------------------------



<input type="text"/>	<input type="checkbox"/>
----------------------	--------------------------











<input type="text"/>	<input type="checkbox"/>
----------------------	--------------------------

Which Is Less?

Name: _____



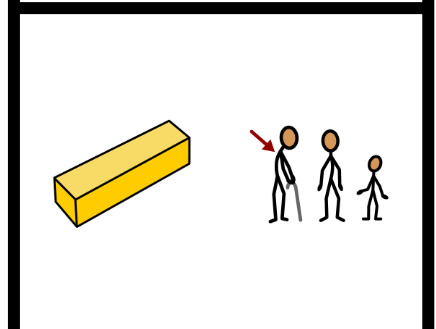
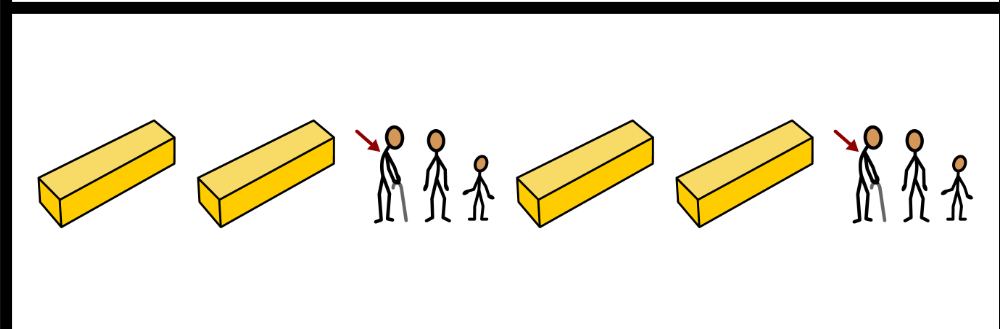

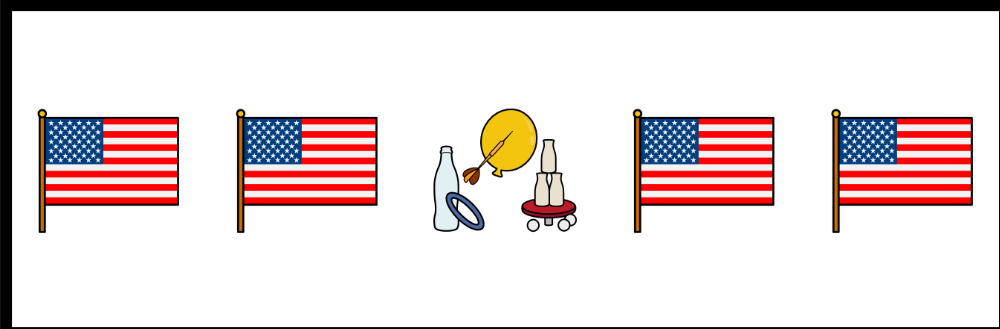
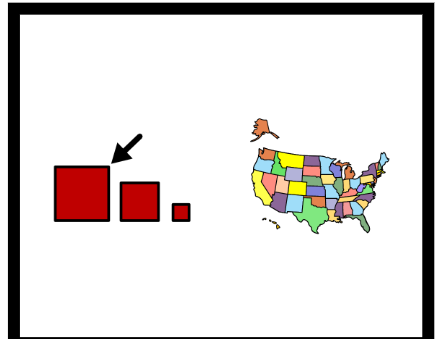
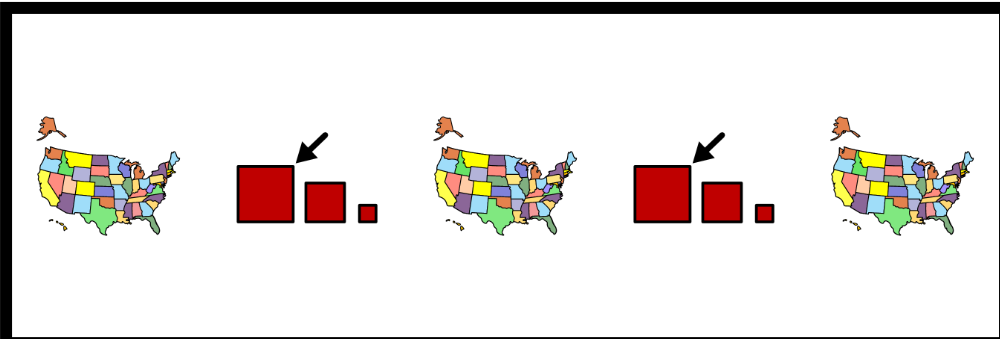
1. Count the items in each row. Place the number in the box.
2. Place a checkmark in the small box next to the number that is less.

	Number	Which is less?
	<input type="text"/>	<input type="checkbox"/>
	<input type="text"/>	<input type="checkbox"/>
	<input type="text"/>	<input type="checkbox"/>
	<input type="text"/>	<input type="checkbox"/>
	<input type="text"/>	<input type="checkbox"/>
	<input type="text"/>	<input type="checkbox"/>
	<input type="text"/>	<input type="checkbox"/>
	<input type="text"/>	<input type="checkbox"/>

Which Comes Next?

Name: _____

1. Look at each symbol pattern.
2. Circle the symbol that comes next.



Word Problems

Name: _____

Fill in the blanks. Solve each word problem.

In 2019 an artist made _____ sculptures.



Show your work.

In 2020 the artist made _____ sculptures.



+

How many sculptures did the artist make altogether?

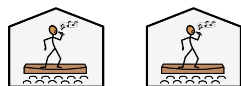
Answer

In 2018 a family went to _____ concerts.



Show your work.

In 2019 the family went to _____ concerts.



-

How many more concerts did the family go to in 2018 than in 2019?


Answer

Time to the Hour

Name: _____

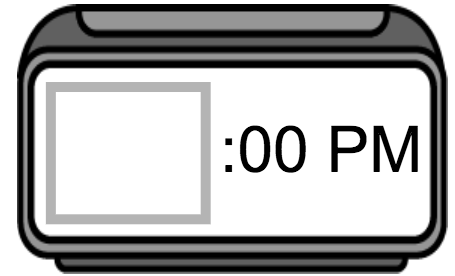
Read the question. Find the answer. Place the time on the clock.

This afternoon friends started planning a trip to a state fair. What time did they start planning the trip?




4:00

7:00



This morning a musician practiced performing songs for a concert. What time did the musician start practicing?




5:00

8:00



This morning a group started planning an activity for a state fair. What time did the group start planning the activity?




11:00

9:00



This afternoon a teacher read an article about a state fair. What time did the teacher start reading the article?




1:00

2:00

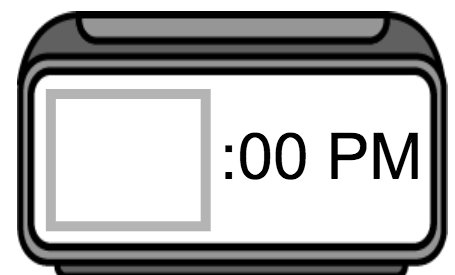


This afternoon students played a game. What time did the students start playing the game?



4:00

3:00




Time to the Half Hour

Name: _____

Read the question. Find the answer. Place the time on the clock.

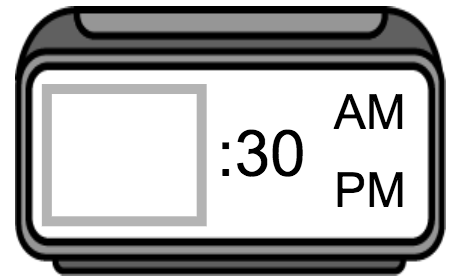
This morning two friends talked about their favorite fair foods. What time did they start talking about their favorite fair foods?




7:30

10:30

12:30



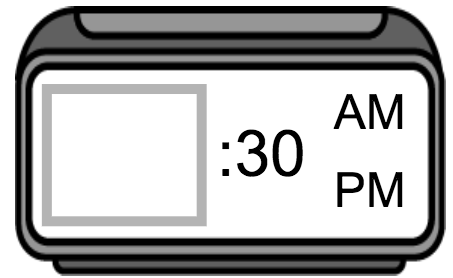
This afternoon an artist carved a butter sculpture. What time did the artist start carving the butter sculpture?




2:30

5:30

6:30



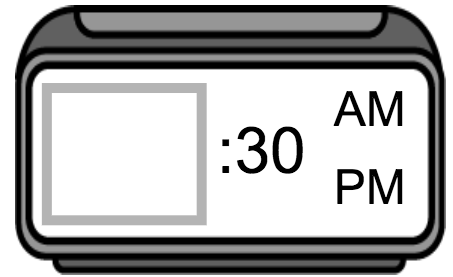
This evening a farmer watched a video about farming. What time did the farmer start watching the video?




7:30

5:30

4:30



This afternoon a family went to a state fair. What time did the family leave the state fair?




4:30

5:30

6:30



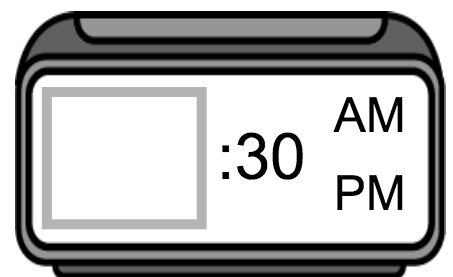
This morning an artist created art for a contest. What time did the artist start creating art?



8:30

10:30

9:30




Time to the Quarter Hour

Name: _____

Read the question. Find the answer. Place the time on the clock.

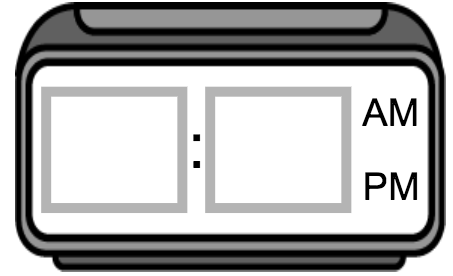
This afternoon a parent read an article about a state fair. What time did the parent start reading the article?




6:45

4:45

12:45



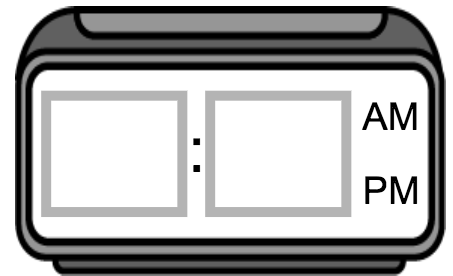
This morning workers cleaned an area at a state fair. What time did the workers start cleaning the area?




5:45

7:15

10:15



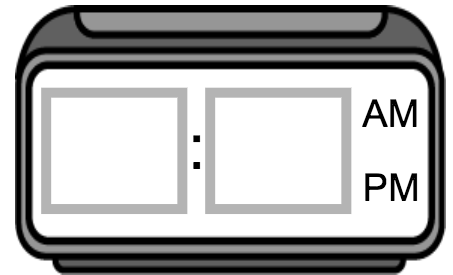
This morning a kid took a photo of Big Tex. What time did the kid take the photo?




11:15

10:15

12:15



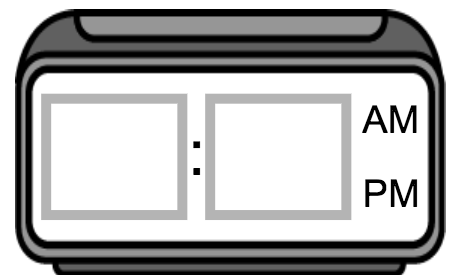
This afternoon a family shared a funnel cake at a fair. What time did the family start sharing the funnel cake?




3:45

4:45

5:45



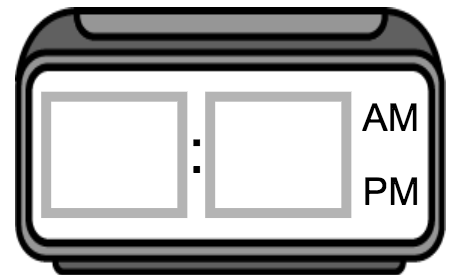
This afternoon friends went to an auto show. What time did the friends arrive at the auto show?



2:15

4:15

3:15

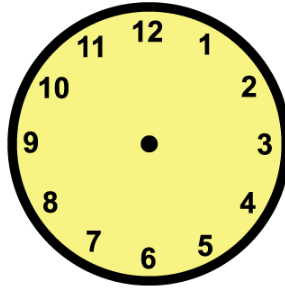


Time Lapse

Name: _____

Read the question. Find the answer. Place the time on the clock.

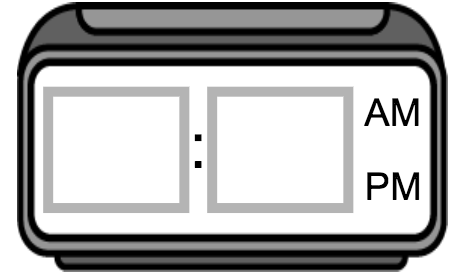
This morning a truck driver went to an auto show. He arrived at the auto show at 9:00 and stayed for 1 hour. What time did he leave the auto show?



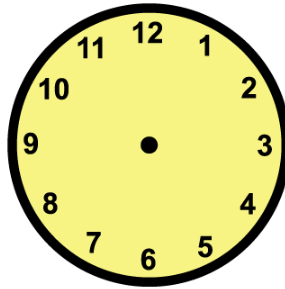
10:00

1:00

7:00



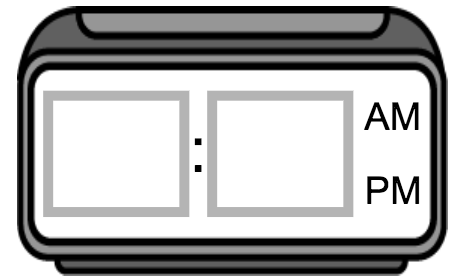
This morning an artist started carving a butter sculpture. The artist started carving at 6:00 and carved for 2 hours and 30 minutes. What time did the artist stop carving?



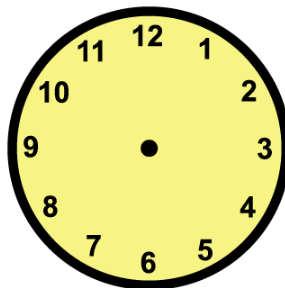
11:00

8:30

7:30



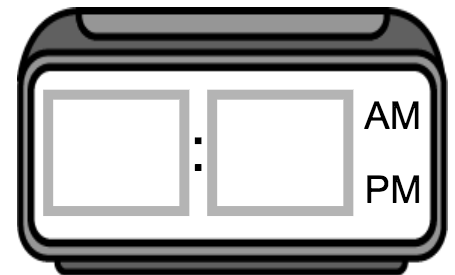
This afternoon a kid rode rides at a state fair. The kid started riding rides at 3:30 and rode rides for 1 hour and 30 minutes. What time did the kid stop riding rides?



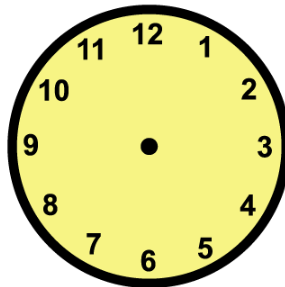
6:30

4:00

5:00



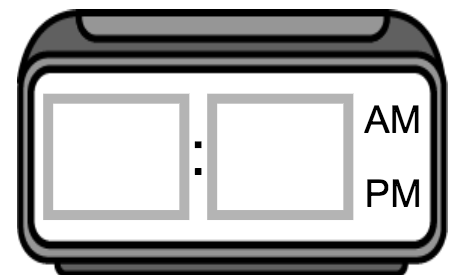
This morning a teacher watched a video about state fairs. The video started at 8:45 and lasted 30 minutes. What time did the video end?



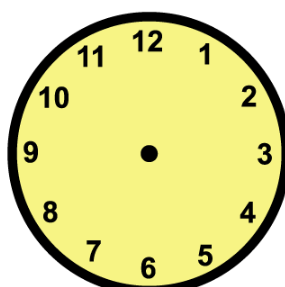
9:15

9:30

9:45



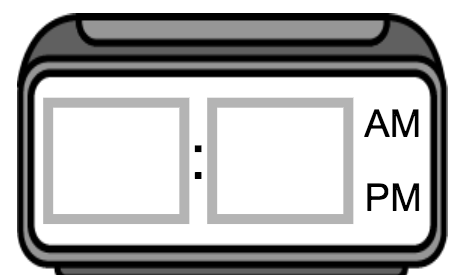
A family went to a state fair today. The family arrived at the fair at 10:30 this morning and stayed for 4 hours and 15 minutes. What time did the family leave the fair?



2:30

2:45


























1:45

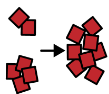


Graphing

Name: _____


- Count the number of symbols in each row. Place that number in the last column.
- Answer the questions about the graph.

chicken									
sculpture									
cow									
fair									
pig									
	1	2	3	4	5	6	7	8	total



1. Which word has the most symbols?

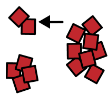

pig



fair



cow



2. Which word has the fewest symbols?

fair



chicken



sculpture



3. What is the highest number?

6

3

7




4. What is the lowest number?

3

5

4



5. Do any words have the same number?

yes




























no

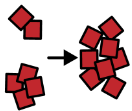


Graphing

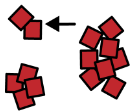
Name: _____

- Count the number of symbols in each row. Place that number in the last column.
- Answer the questions about the graph.

									total
chicken									
sculpture									
cow									
fair									
pig									



1. Which word has the most symbols?



2. Which word has the fewest symbols?



3. What is the highest number?



4. What is the lowest number?




























5. Do any words have the same number?

Graphing

Name: _____

- Count the number of symbols in each row. Place that number in the last column.
- Answer the questions about the graph.

									total
chicken									<input type="text"/>
sculpture									<input type="text"/>
cow									<input type="text"/>
fair									<input type="text"/>
pig									<input type="text"/>

- Which word has the most symbols?
- Which word has the fewest symbols?
- What is the highest number?
- What is the lowest number?
- Do any words have the same number?
- Are there more sculpture symbols or chicken symbols?
- How many more fair symbols are there than cow symbols?

$$\begin{array}{c}
 \boxed{} - \boxed{} = \boxed{} \\
 \text{fair} \qquad \qquad \text{cow}
 \end{array}$$

Graphing

Name: _____

1. Count the number of times each word appears in this week's news pages.
2. Starting at the bottom of each column, fill in the squares to match that number.

10					
9					
8					
7					
6					
5					
4					
3					
2					
1					

states



U.S.



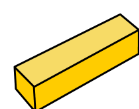
fair



foods



butter


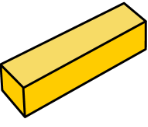


Graphing Review


Name: _____

Use the graph on the previous page to answer the questions.



Which word had the most?

states 	U.S. 	fair 	foods 	butter 
---	---	--	--	---

Which word had the fewest?

states 	U.S. 	fair 	foods 	butter 
---	---	--	--	---

Were any numbers the same?

yes 	no 
--	---

What was the highest number? _____

Which was your favorite word?

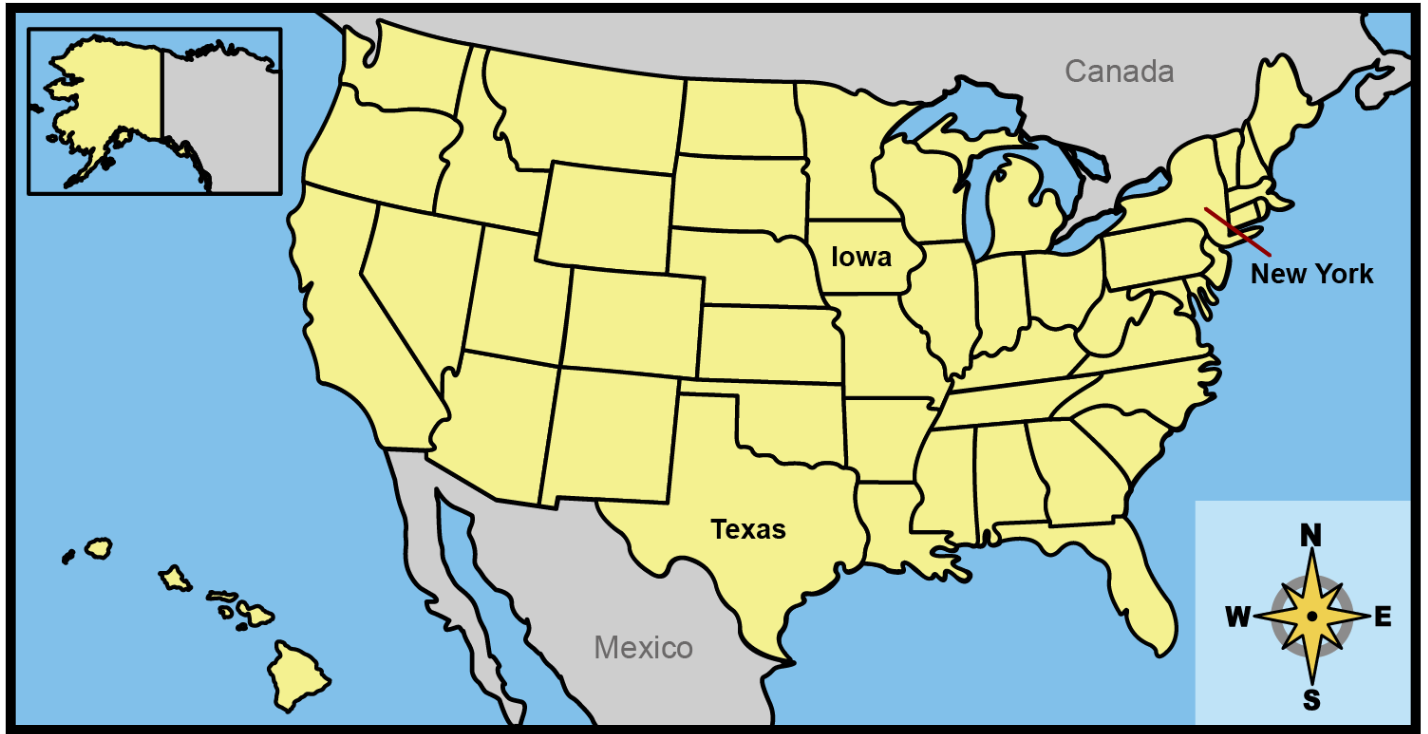
states 	U.S. 	fair 	foods 	butter 
---	---	--	--	---

Geography

Name: _____

Use the map to answer the questions.

U.S. States



What places is this page about?

U.S. states



Canadian provinces



Italian islands



Iowa



Texas



New York



What state on this map is farthest east?

east



north



south



What direction would you travel to go from Iowa to Texas?

Geography

Name: _____

Use the map to answer the questions.

U.S. States



What places is this page about? _____



What state on this map is farthest east? _____



What direction would you travel to go from Iowa to Texas? _____



What is the smallest state on this map? _____



What body of water is near Texas? _____



What country borders the U.S. to the north? _____